



**Number Stories
With
Calculators**

Ross and Jenny went on a picnic.
Ross saw 4 ants crawling towards
the food. Jenny saw 2 ants.
How many ants did they see in all?



$$4 + 2 = 6$$

They saw 6
ants in all.

Sharon has 4 beach pails.

She also has 4 shovels.

How many beach toys does she have in all?

$$4 + 4 = 8$$

Sharon has 8 beach toys.




There were 3 dogs playing in the park. 5 more dogs came to play.
How many dogs were at the park?



There were 8 dogs at the park.

There were 9 pieces of watermelon. Lily ate 2 pieces.

How many pieces of watermelon are left?



Yummy!!


$$9 - 2 = 7$$

There are 7 pieces left.

There were 8 fish swimming together.

3 of the fish swam away.

How many fish are there now?



$$8 - 3 = 5$$

Now there are 5 fish.

There were 10 kites flying in the sky. 4 of the kites flew away.

How many kites are there now?



$$10 - 4 = 6$$

There are
6 kites in
the sky.